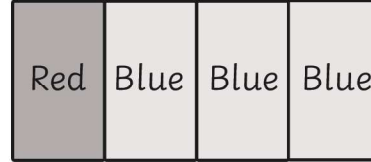


Adding Fractions


Name..... Date.....

Colour in the correct number of boxes and write the answer to the fraction sums. Example:

a) $\frac{1}{4} + \frac{3}{4} = \frac{4}{4}$
Red Blue




b) $\frac{1}{4} + \frac{2}{4} = \frac{\quad}{4}$
Red Blue



c) $\frac{2}{5} + \frac{1}{5} = \frac{\quad}{5}$
Red Blue



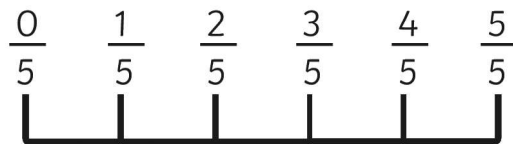
d) $\frac{1}{3} + \frac{2}{3} = \frac{\quad}{3}$
Red Blue



Use the fraction numberline to find the answer to the fraction sums.

e) $\frac{1}{5} + \frac{3}{5} =$

f) $\frac{1}{5} + \frac{4}{5} =$



g) $\frac{2}{6} + \frac{3}{6} =$

h) $\frac{1}{6} + \frac{4}{6} =$

