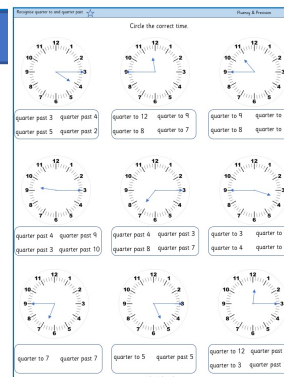


## ★ Recognise quarter to and quarter past

Children read and draw the times 'quarter to' and 'quarter past'. They use their knowledge of fractions and turns to identify quarter past and quarter to. Children should recognise that the hour hand moves along with the minute hand. Therefore when the time is quarter past the hour, the hour hand will be just past the hour and when the time is quarter to, the hour hand will be just before the hour. Children on this sheet have given times as options to choose from.

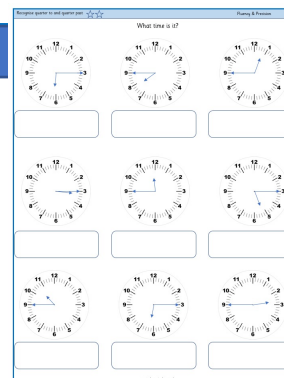
masterthecurriculum.co.uk



## ★★ Recognise quarter to and quarter past

Children read and draw the times 'quarter to' and 'quarter past'. They use their knowledge of fractions and turns to identify quarter past and quarter to. Children should recognise that the hour hand moves along with the minute hand. Therefore when the time is quarter past the hour, the hour hand will be just past the hour and when the time is quarter to, the hour hand will be just before the hour. Children on this sheet have no options and read the time and write it.

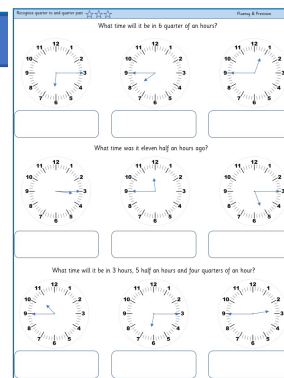
masterthecurriculum.co.uk



## ★★★ Recognise quarter to and quarter past

Children on this sheet will have to work out what the time will be after hours and minutes are added.

masterthecurriculum.co.uk



## Reasoning & Problem Solving

### Recognise quarter to and quarter past

Children continue to demonstrate their understanding of time by answering reasoning tasks.

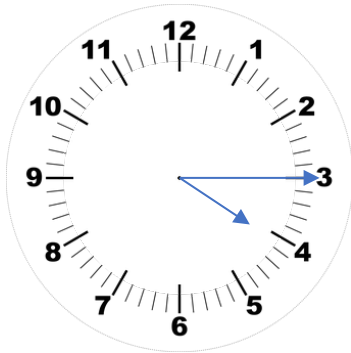
Recognise quarter to and quarter past
Reasoning & Problem Solving

The clocks show quarter to and quarter past times. Paint has spilt over them, can you still tell the time? Explain how you know.

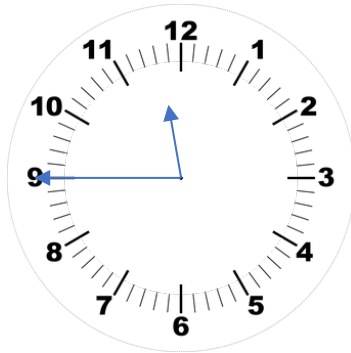
How many quarters of an hour are between 10 o'clock and 1 o'clock? Explain how you found the answer.



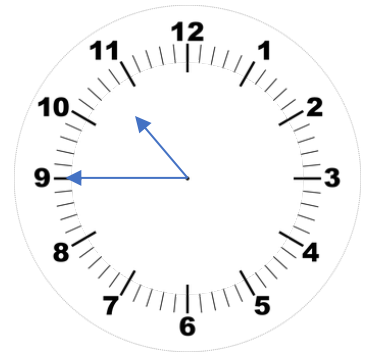
Circle the correct time.



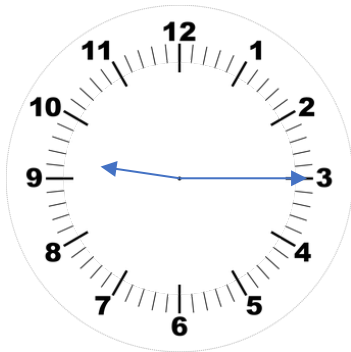
quarter past 3    quarter past 4  
quarter past 5    quarter past 2



quarter to 12    quarter to 9  
quarter to 8    quarter to 7



quarter to 9    quarter to 10  
quarter to 8    quarter to 11



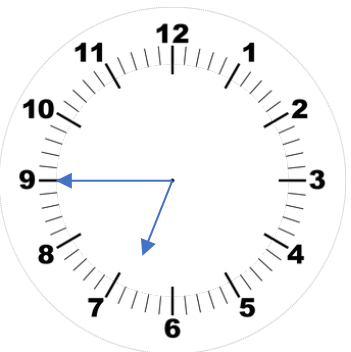
quarter past 4    quarter past 9  
quarter past 3    quarter past 10



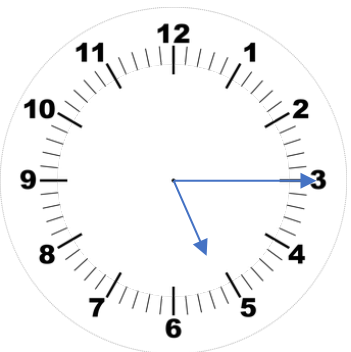
quarter past 4    quarter past 3  
quarter past 8    quarter past 7



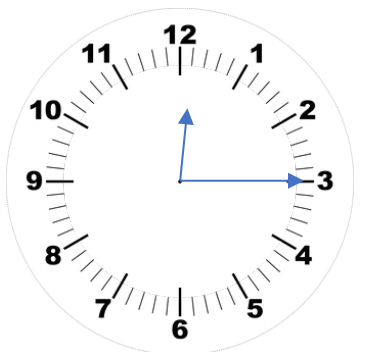
quarter to 3    quarter to 9  
quarter to 4    quarter to 10



quarter to 7    quarter past 7



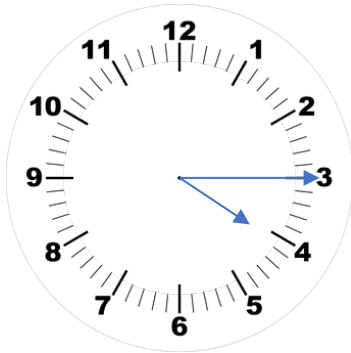
quarter to 5    quarter past 5



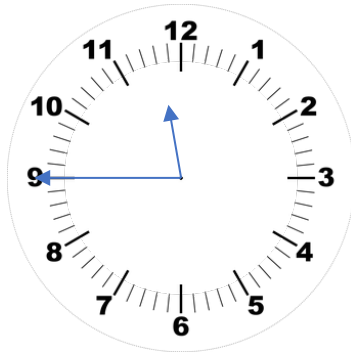
quarter to 12    quarter past 3  
quarter to 3    quarter past 12



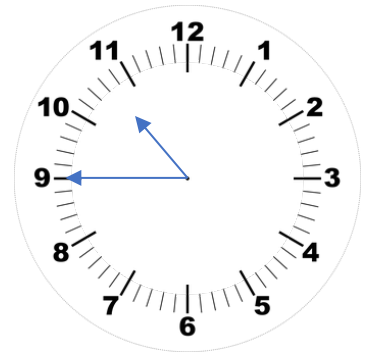
Circle the correct time.



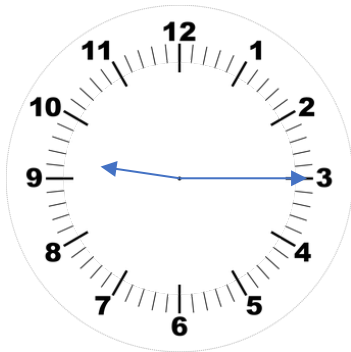
quarter past 3 **quarter past 4**  
 quarter past 5 quarter past 2



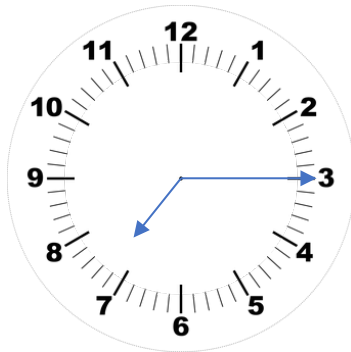
**quarter to 12** quarter to 9  
 quarter to 8 quarter to 7



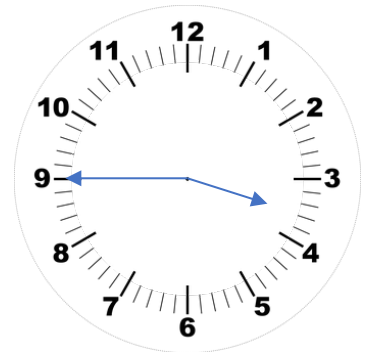
quarter to 9 quarter to 10  
 quarter to 8 **quarter to 11**



quarter past 4 **quarter past 9**  
 quarter past 3 quarter past 10



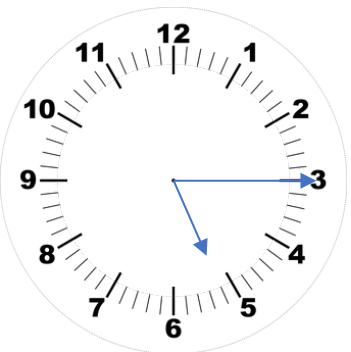
quarter past 4 quarter past 3  
 quarter past 8 **quarter past 7**



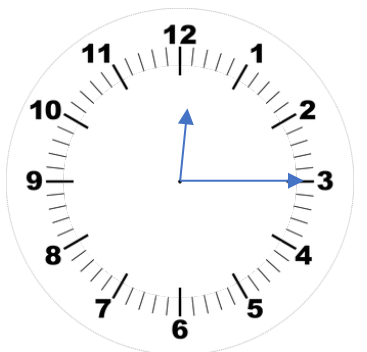
quarter to 3 quarter to 9  
**quarter to 4** quarter to 10



**quarter to 7** quarter past 7



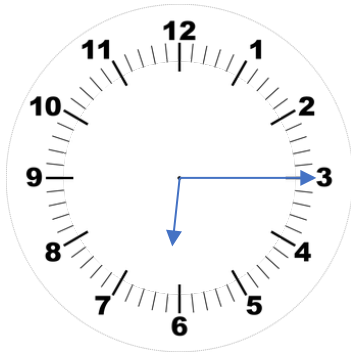
quarter to 5 **quarter past 5**

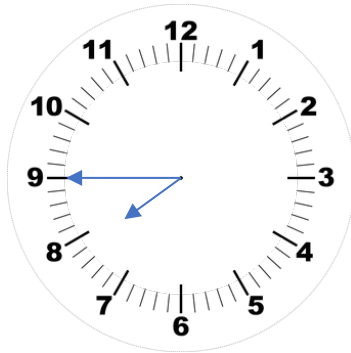


quarter to 12 quarter past 3  
 quarter to 3 **quarter past 12**

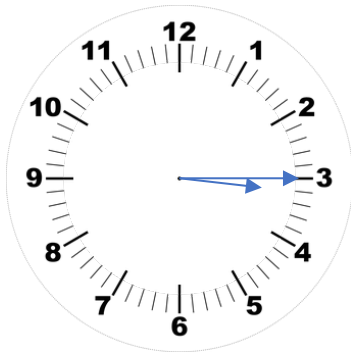


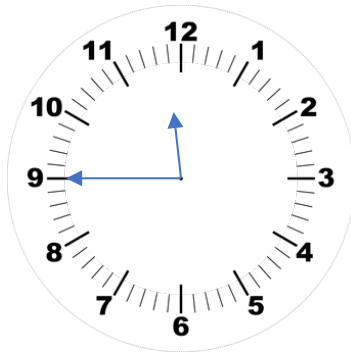
What time is it?

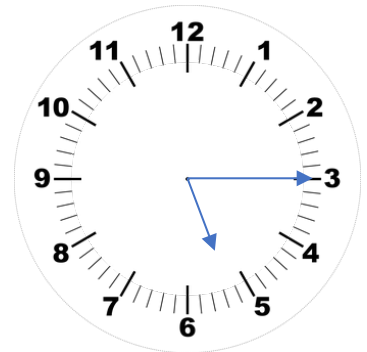


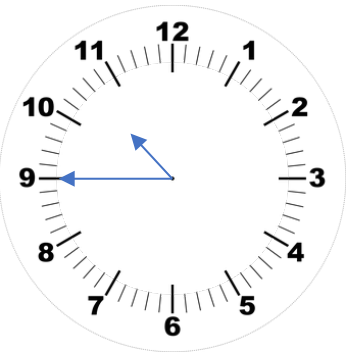


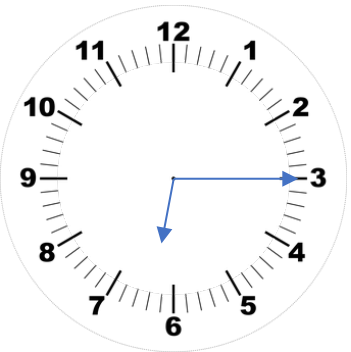


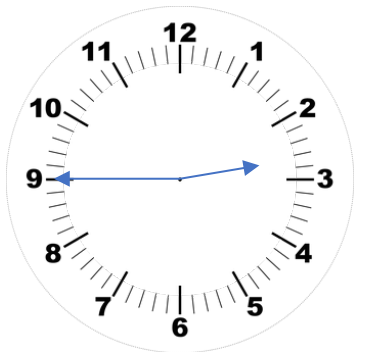










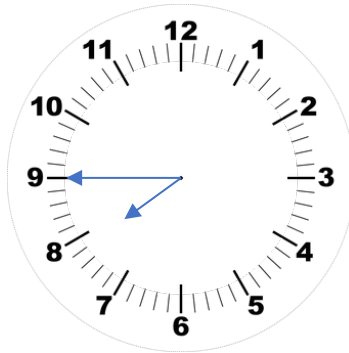




What time is it?



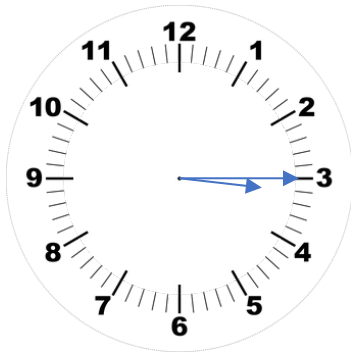
quarter past 6



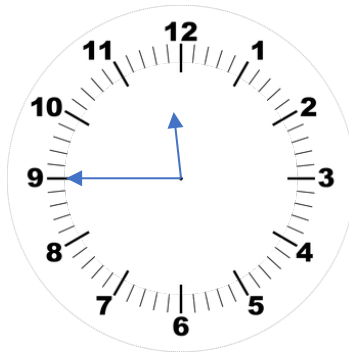
quarter to 8



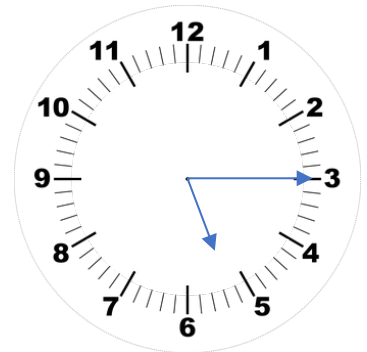
quarter to 1



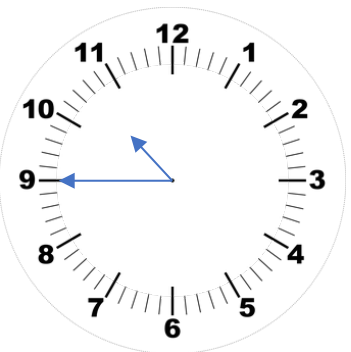
quarter past 3



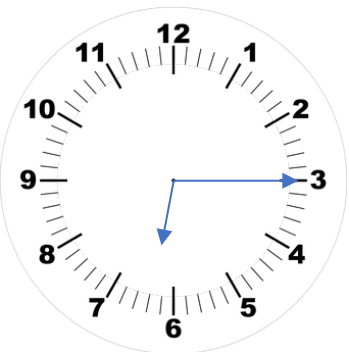
quarter to 12



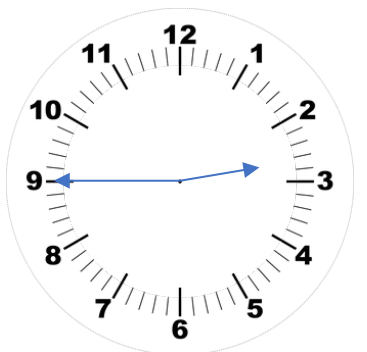
quarter past 5



quarter to 11



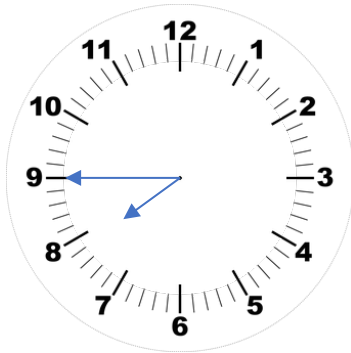
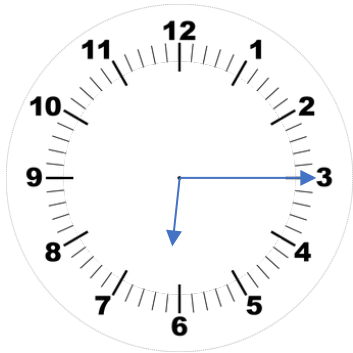
quarter past 6



quarter to 3

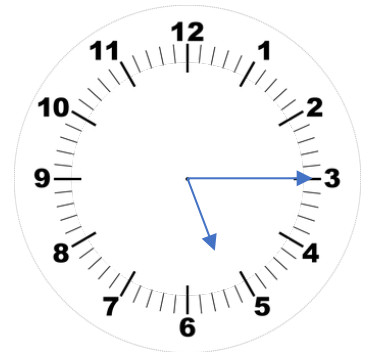
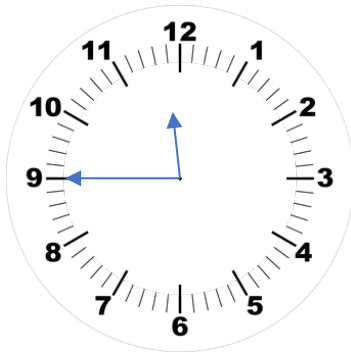
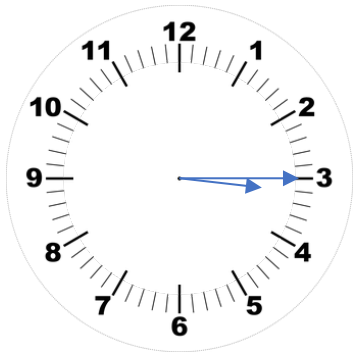


What time will it be in 6 quarter of an hours?



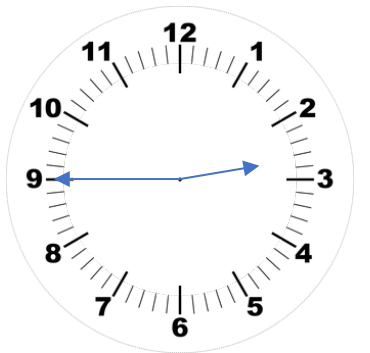
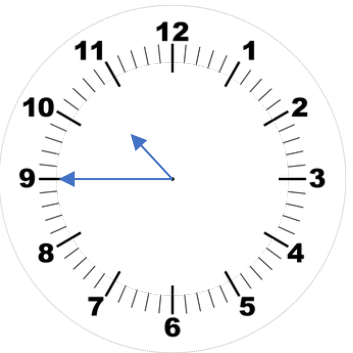



What time was it eleven half an hours ago?



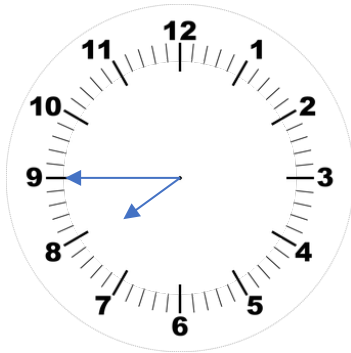
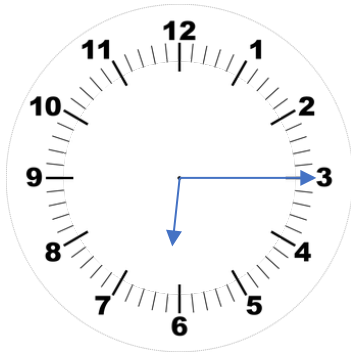



What time will it be in 3 hours, 5 half an hours and four quarters of an hour?





What time will it be in 6 quarter of an hours?

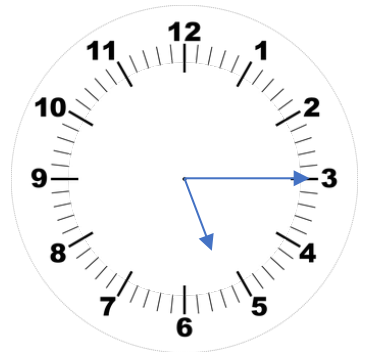
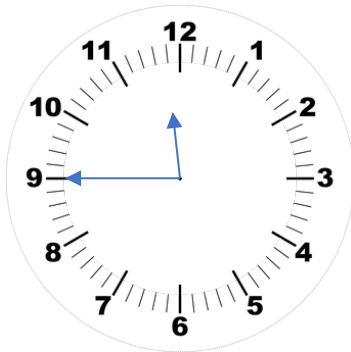
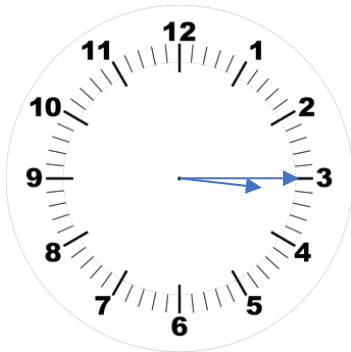


quarter to 8

quarter past 10

quarter past 2

What time was it eleven half an hours ago?

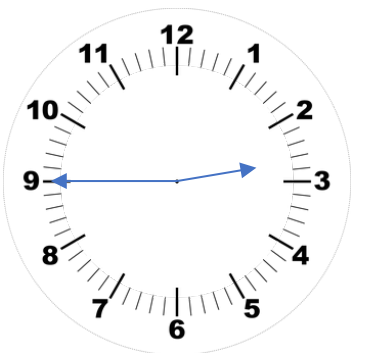
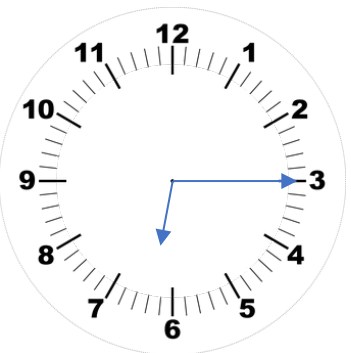
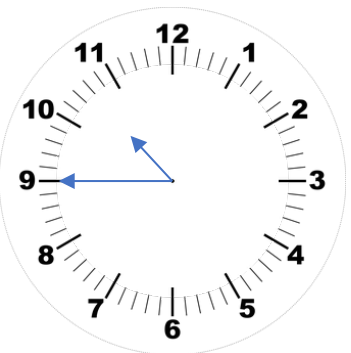


quarter to 10

quarter past 6

quarter to 12

What time will it be in 3 hours, 5 half an hours and four quarters of an hour?



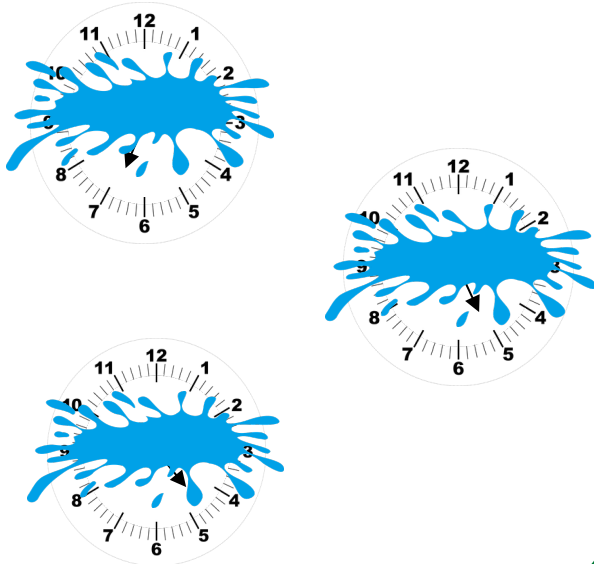
quarter past 5

quarter to 1

quarter past 9

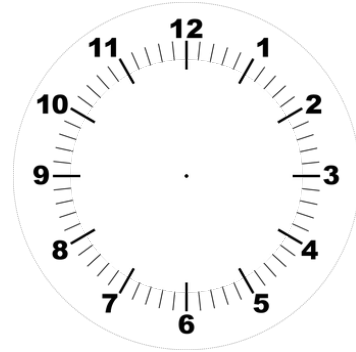
The clocks show quarter to and quarter past times.

Paint has spilt over them, can you still tell the time?  
Explain how you know.



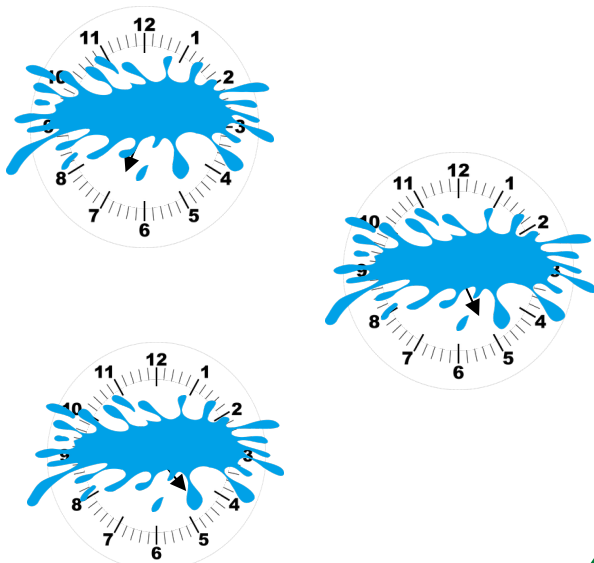
How many quarters of an hour are between 10 o'clock and 1 o'clock?

Explain how you found the answer.



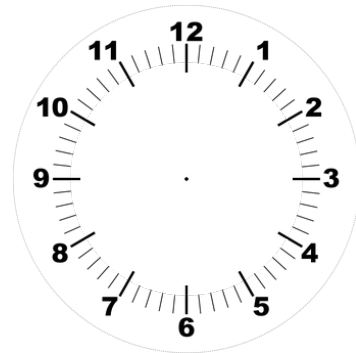
The clocks show quarter to and quarter past times.

Paint has spilt over them, can you still tell the time?  
Explain how you know.



How many quarters of an hour are between 10 o'clock and 1 o'clock?

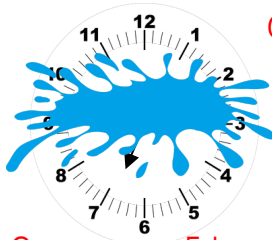
Explain how you found the answer.





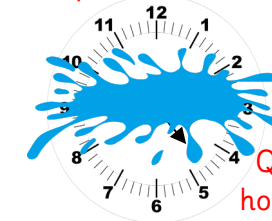
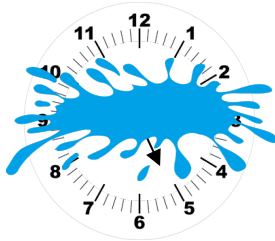
The clocks show quarter to and quarter past times.

Paint has spilt over them, can you still tell the time?  
Explain how you know.



Quarter to 7 because  
the hour hand is  
close to the 7.

Quarter past 5 because  
the hour hand has just  
passed the 5.

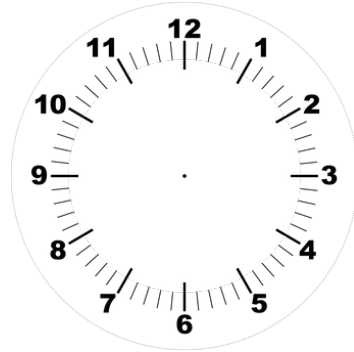


Quarter to 5 because the  
hour hand is close to the 5.

masterthecurriculum.co.uk

How many quarters of an hour are between  
10 o'clock and 1 o'clock?

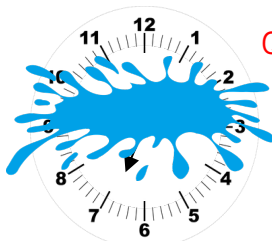
Explain how you found the answer.



There are 12. In one hour there are 4 quarters  
of an hour, so in 3 hours, there will be 12.

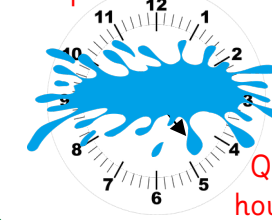
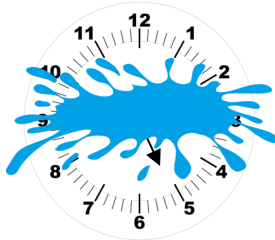
The clocks show quarter to and quarter past times.

Paint has spilt over them, can you still tell the time?  
Explain how you know.



Quarter to 7 because  
the hour hand is  
close to the 7.

Quarter past 5 because  
the hour hand has just  
passed the 5.

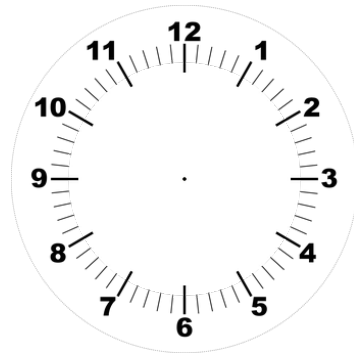


Quarter to 5 because the  
hour hand is close to the 5.

masterthecurriculum.co.uk

How many quarters of an hour are between  
10 o'clock and 1 o'clock?

Explain how you found the answer.



There are 12. In one hour there are 4 quarters  
of an hour, so in 3 hours, there will be 12.