

★ Recognise o'clock and half past

Children recap the Year one objective of telling the time to the hour and half past the hour. Children should be given the opportunity to create times using individual clocks with moveable hands so that children can read times from the clock.

Children on this sheet have given options to choose the correct time from.

masterthecurriculum.co.uk

Recognise o'clock and half past

Circle the correct time.

6 'o'clock 4 'o'clock 9 'o'clock 12 'o'clock 1 'o'clock 11 'o'clock  
 half past 4 half past 3 half past 12 half past 9 half past 11 half past 12

half past 1 half past 5 3 'o'clock 10 'o'clock half past 4 half past 5  
 1 'o'clock 12 'o'clock 3 'o'clock 10 'o'clock 6 'o'clock 5 'o'clock

half past 7 7 'o'clock 12 'o'clock half past 11 half past 12 half past 1  
 half past 6 6 'o'clock 1 'o'clock half past 12 12 'o'clock 1 'o'clock

★★ Recognise o'clock and half past

Children recap the Year one objective of telling the time to the hour and half past the hour. Children should be given the opportunity to create times using individual clocks with moveable hands so that children can read times from the clock.

Children on this sheet read the time from the clock and write the correct time.

masterthecurriculum.co.uk

Recognise o'clock and half past

Write the time the clock is showing.

★★★ Recognise o'clock and half past

Children on this sheet have to read the time and then work out what time time will be in given half an hours.

masterthecurriculum.co.uk

Recognise o'clock and half past

What time will it be in 4 half an hours?

What time will it be in 7 half an hours?

What time was it eleven half an hours ago?

Reasoning & Problem Solving

Recognise o'clock and half past

Children continue to demonstrate their understanding of time by answering reasoning tasks.

Recognise o'clock and half past

The minute hand has fallen off of the clocks. Joe says he can still tell if it is an o'clock time or half past time. Can you? Explain how you know.

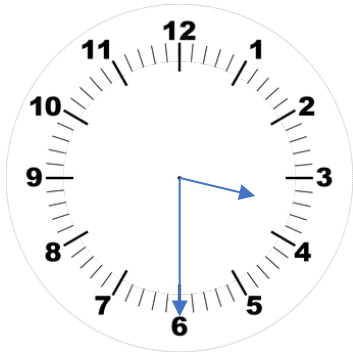
If it is an o'clock time, then both hands will be on the same number.

What do you think about Leanna's and Rosie's conversation?

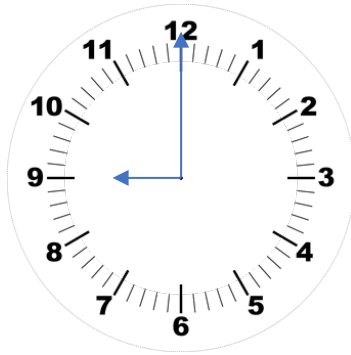
Yes, like 12 o'clock.



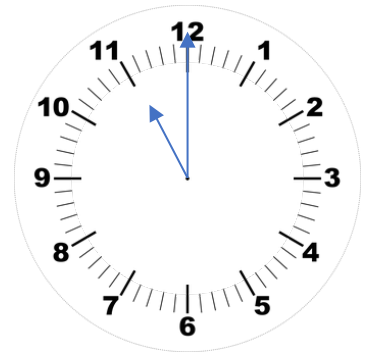
Circle the correct time.



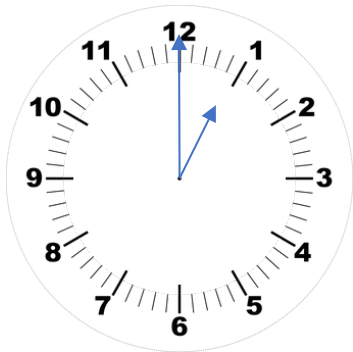
6 'o clock    4 'o clock  
half past 4    half past 3



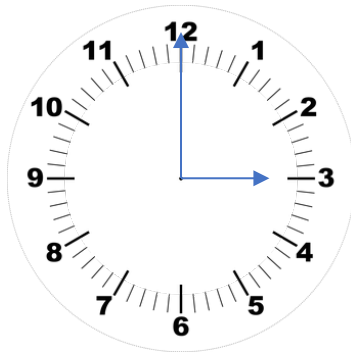
9 'o clock    12 'o clock  
half past 12    half past 9



1 'o clock    11 'o clock  
half past 11    half past 12



half past 1    half past 5  
1 'o clock    12 'o clock



half past 12    half past 3  
3 'o clock    10 'o clock



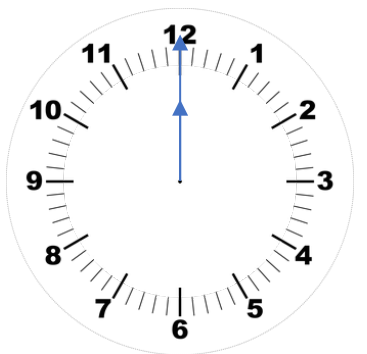
half past 4    half past 5  
6 'o clock    5 'o clock



half past 7    7 'o clock  
half past 6    6 'o clock



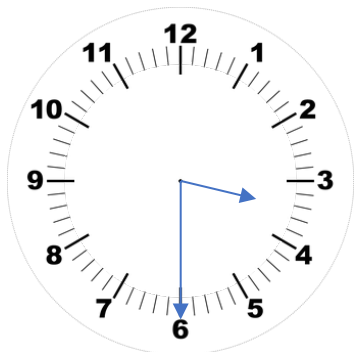
12 'o clock    half past 11  
1 'o clock    half past 12



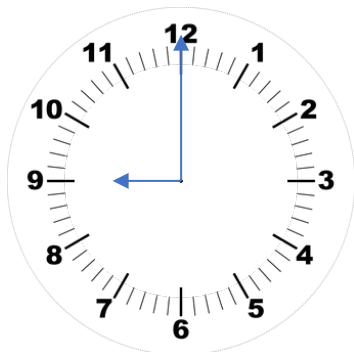
half past 12    half past 1  
12 'o clock    1 'o clock



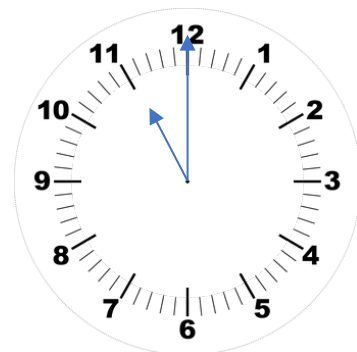
Circle the correct time.



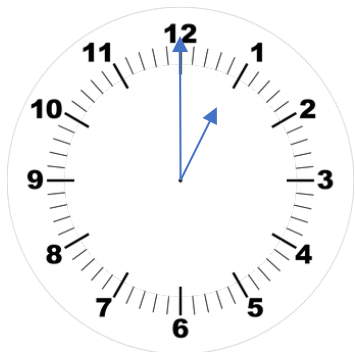
6 'o clock    4 'o clock  
 half past 4    **half past 3**



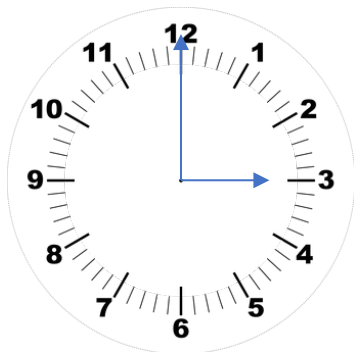
**9 'o clock**    12 'o clock  
 half past 12    half past 9



1 'o clock    **11 'o clock**  
 half past 11    half past 12



half past 1    half past 5  
**1 'o clock**    12 'o clock



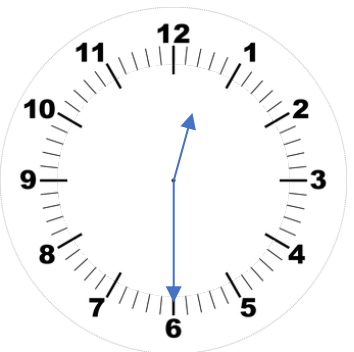
half past 12    half past 3  
**3 'o clock**    10 'o clock



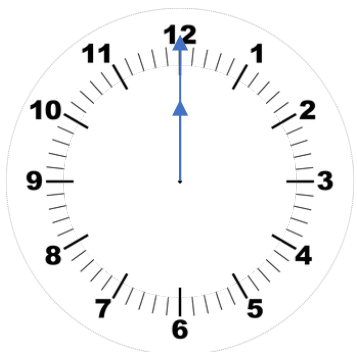
**half past 4**    half past 5  
 6 'o clock    5 'o clock



half past 7    7 'o clock  
**half past 6**    6 'o clock

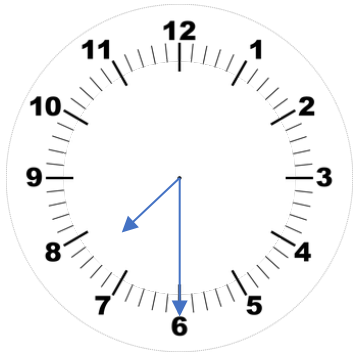


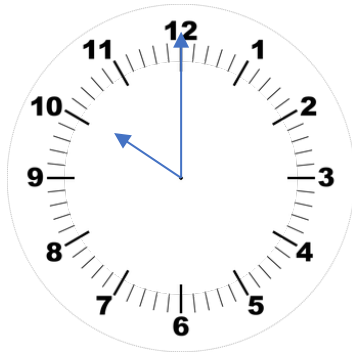
12 'o clock    half past 11  
 1 'o clock    **half past 12**

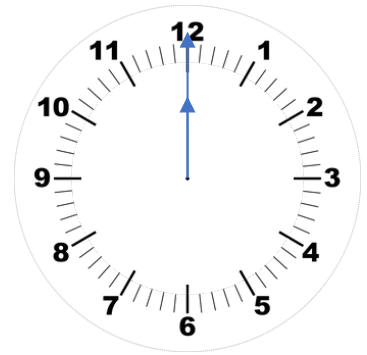


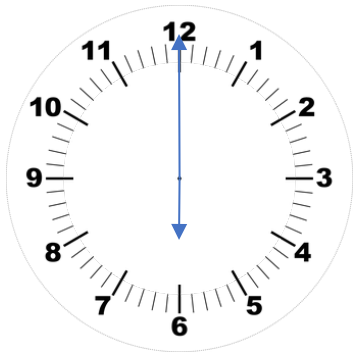
half past 12    half past 1  
**12 'o clock**    1 'o clock

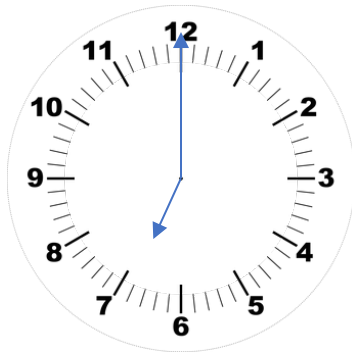
Write the time the clock is showing.



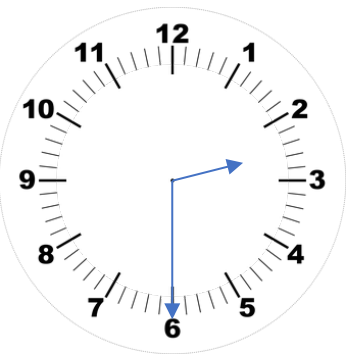


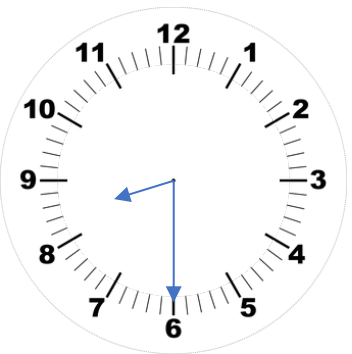


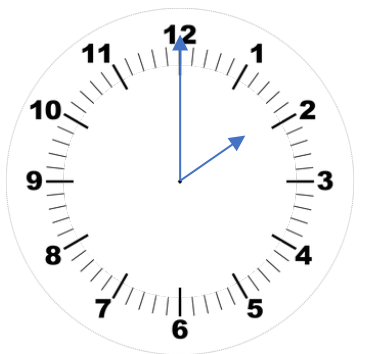




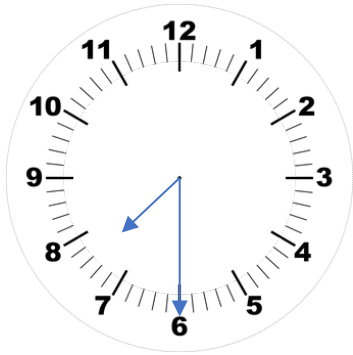




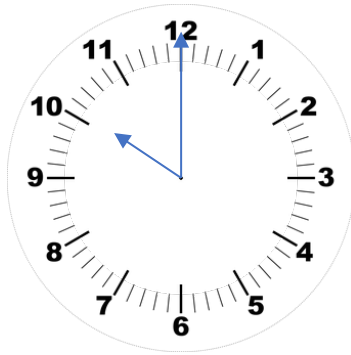




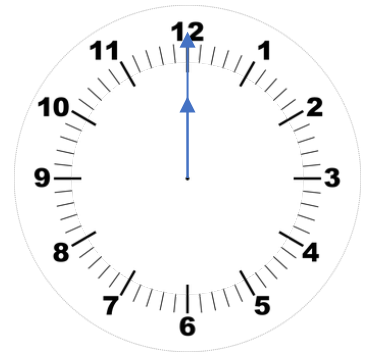
Write the time the clock is showing.



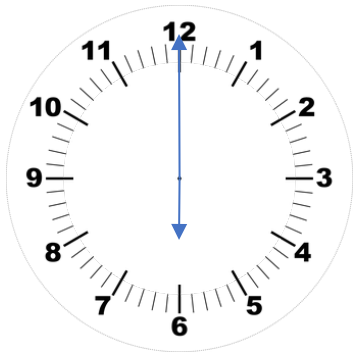
half past 7



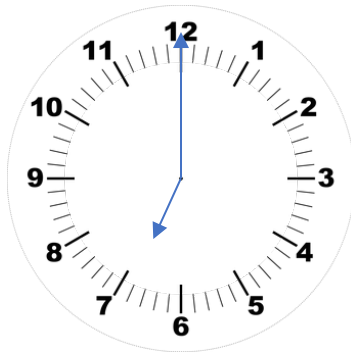
10 o'clock



12 o'clock



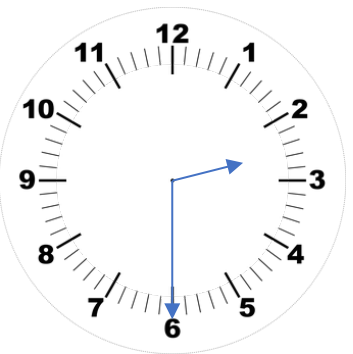
6 o'clock



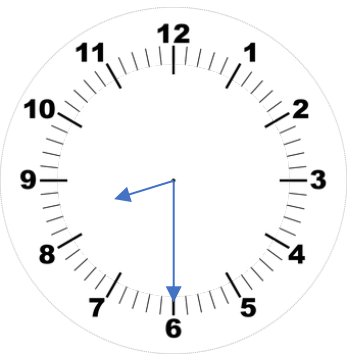
7 o'clock



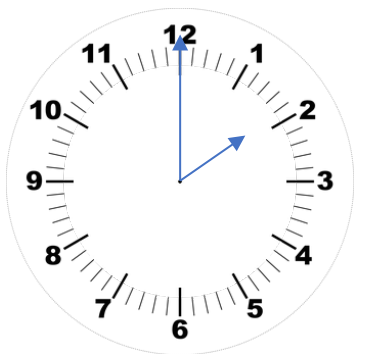
half past 6



half past 2



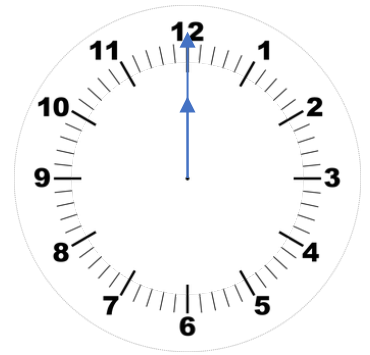
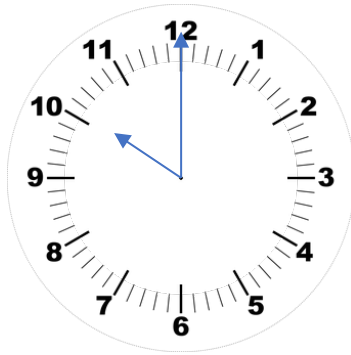
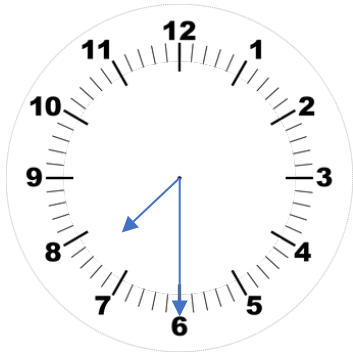
half past 8



2 o'clock

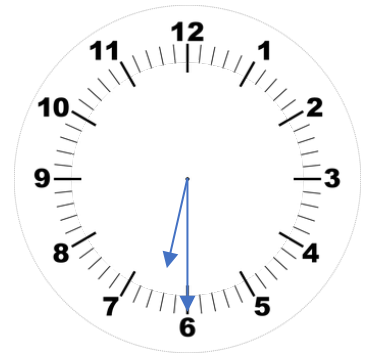
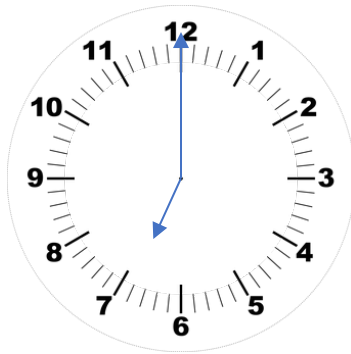
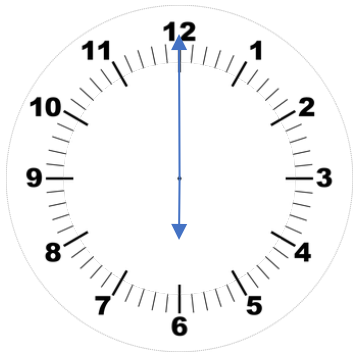


What time will it be in 4 half an hours?



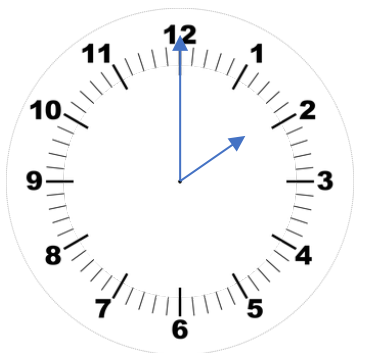
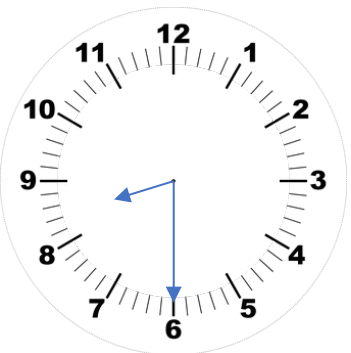
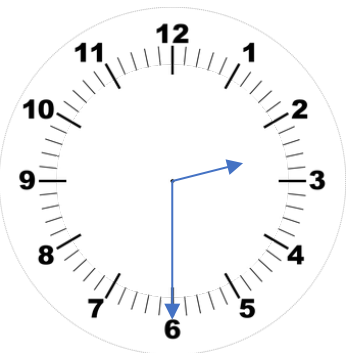



What time will it be in 7 half an hours?



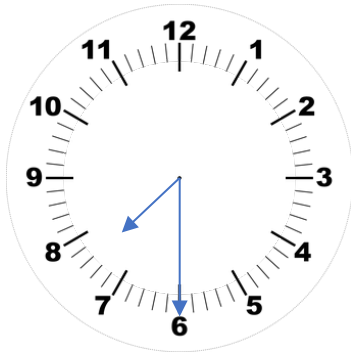



What time was it eleven half an hours ago?

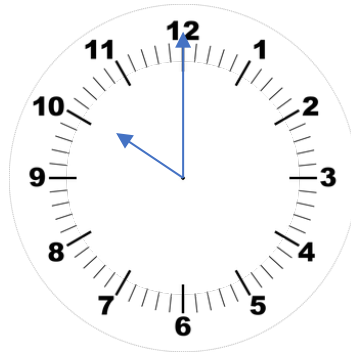




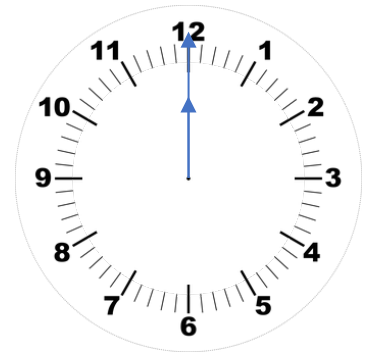
What time will it be in 4 half an hours?



half past 9

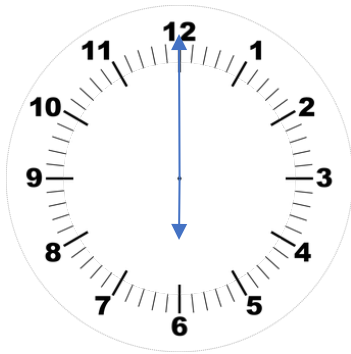


12 o'clock

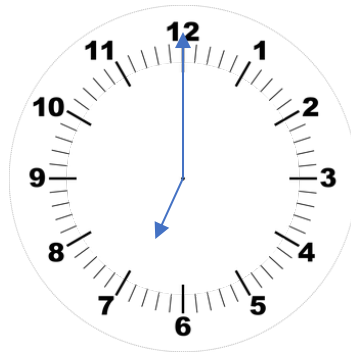


2 o'clock

What time will it be in 7 half an hours?



half past 9

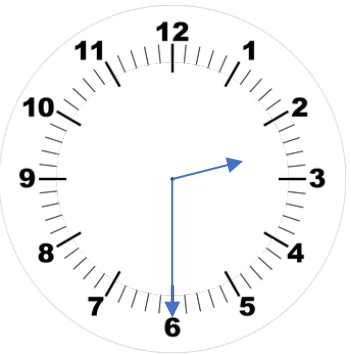


half past 10

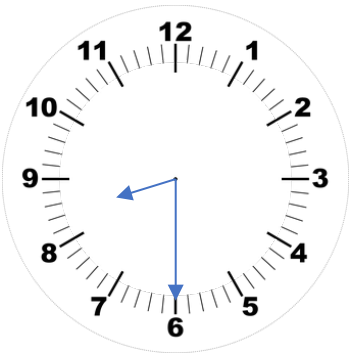


10 o'clock

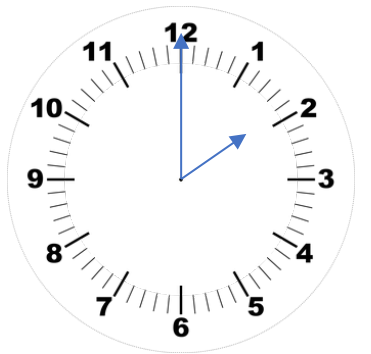
What time was it eleven half an hours ago?



9 o'clock



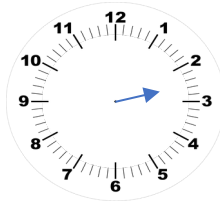
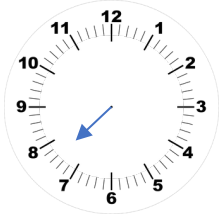
3 o'clock



half past 8

The minute hand has fallen off of the clocks.  
Joe says he can still tell if it is an o'clock time  
or half past time.

Can you? Explain how you know.



masterthecurriculum.co.uk



If it is an o'clock time, then  
both hands will be on the  
same number.

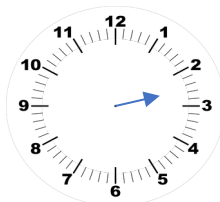
What do you think about Leanna's and  
Rosie's conversation?

Yes, like 12 o'clock.



The minute hand has fallen off of the clocks.  
Joe says he can still tell if it is an o'clock time  
or half past time.

Can you? Explain how you know.



masterthecurriculum.co.uk



If it is an o'clock time, then  
both hands will be on the  
same number.

What do you think about Leanna's and  
Rosie's conversation?

Yes, like 12 o'clock.





The minute hand has fallen off of the clocks. Joe says he can still tell if it is an o'clock time or half past time.

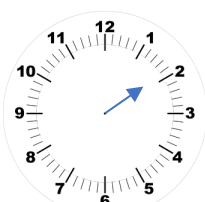
Can you? Explain how you know.

The hour hand is in between the 7 and 8. This means it is around half past 7.



half past 7

2 o'clock



The hour hand is pointing at the 2. This means it is around 2 o'clock.

half past 2



The hour hand is in between the 2 and 3. This means it is around half past 2.

If it is an o'clock time, then both hands will be on the same number.



This only works with 12 o'clock, all of the other times will have one clock hand on the 12 and the other on the hour it is showing.

What do you think about Leanna's and Rosie's conversation?

Yes, like 12 o'clock.



The minute hand has fallen off of the clocks. Joe says he can still tell if it is an o'clock time or half past time.

Can you? Explain how you know.

The hour hand is in between the 7 and 8. This means it is around half past 7.



half past 7

2 o'clock



The hour hand is pointing at the 2. This means it is around 2 o'clock.

half past 2



The hour hand is in between the 2 and 3. This means it is around half past 2.

If it is an o'clock time, then both hands will be on the same number.



This only works with 12 o'clock, all of the other times will have one clock hand on the 12 and the other on the hour it is showing.

What do you think about Leanna's and Rosie's conversation?

Yes, like 12 o'clock.

